



Measure the width of each block in inches and in centimeters.

Ex) 

**Answers**

Exin. 3

Excm. 7 - 8

1) 

1in. \_\_\_\_\_

1cm. \_\_\_\_\_

2) 


2in. \_\_\_\_\_

2cm. \_\_\_\_\_

3) 

3in. \_\_\_\_\_

3cm. \_\_\_\_\_

4) 

4in. \_\_\_\_\_

4cm. \_\_\_\_\_

5) 

5in. \_\_\_\_\_

5cm. \_\_\_\_\_

6) 

6in. \_\_\_\_\_

6cm. \_\_\_\_\_

7) 

7in. \_\_\_\_\_

7cm. \_\_\_\_\_

8) 


8in. \_\_\_\_\_

8cm. \_\_\_\_\_

9) 

9in. \_\_\_\_\_

9cm. \_\_\_\_\_


10) 

10in. \_\_\_\_\_

10cm. \_\_\_\_\_



Measure the width of each block in inches and in centimeters.



**Answers**

Exin. 3

Excm. 7 - 8

1in. 3 1/2

1cm. 8 - 9

2in. 5 1/2

2cm. 13 - 14

3in. 4 1/2

3cm. 11 - 12

4in. 0 1/2

4cm. 1 - 2

5in. 1 1/2

5cm. 3 - 4

6in. 1

6cm. 2 - 3

7in. 4

7cm. 10 - 11

8in. 2

8cm. 5 - 6

9in. 5

9cm. 12 - 13

10in. 2 1/2

10cm. 6 - 7